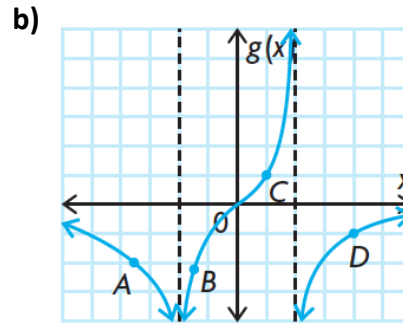
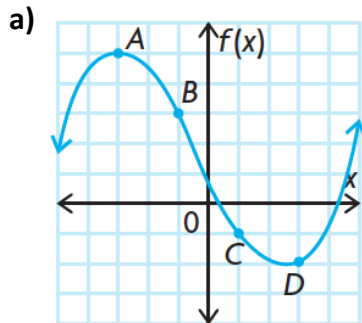


W3 – Concavity and the Second Derivative

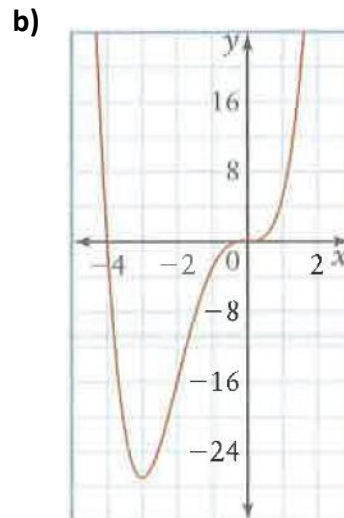
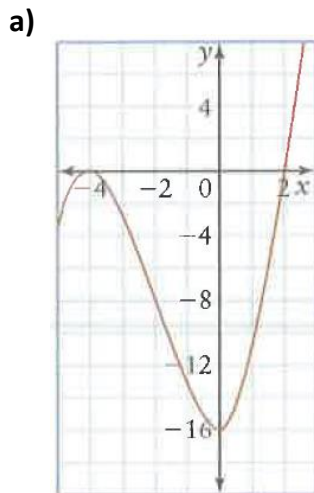
MCV4U

Jensen

1) For each function, state whether the value of the of the second derivative is positive or negative at each of points A , B , C , and D .

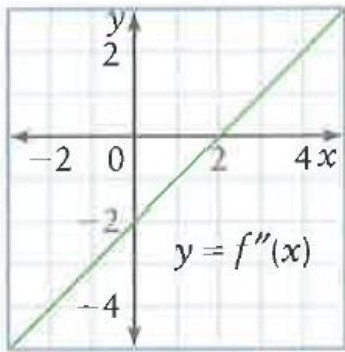


2) For each graph, identify the intervals over which the graph is concave up and the intervals over which it is concave down.

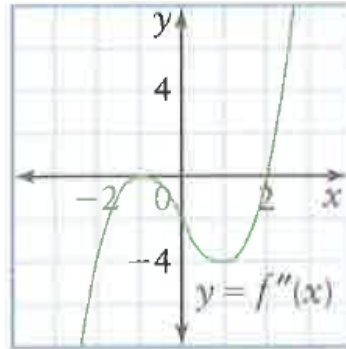


3) Given each graph of $f''(x)$, state the intervals of concavity for the function $f(x)$. Also indicate where any points of inflection occur for $f(x)$.

a)



b)



4) For each function, find the intervals of concavity and the coordinates of any points of inflection.

a) $y = 6x^2 - 7x + 5$

b) $g(x) = -2x^3 + 12x^2 - 9$

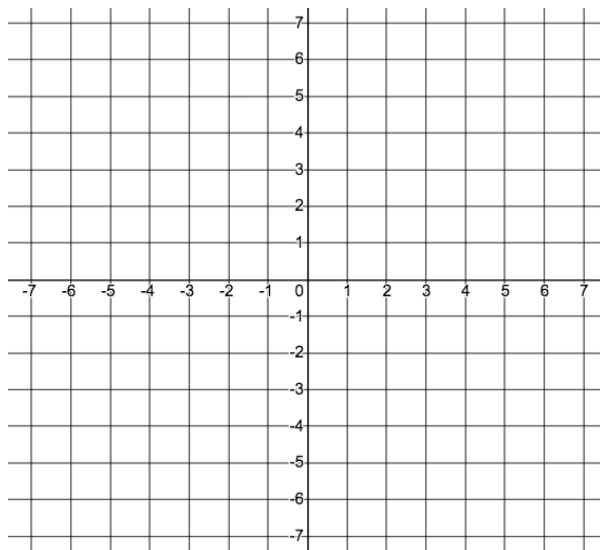
5) For each function, find and classify all the critical points using the second derivative test.

a) $y = x^2 + 10x - 11$

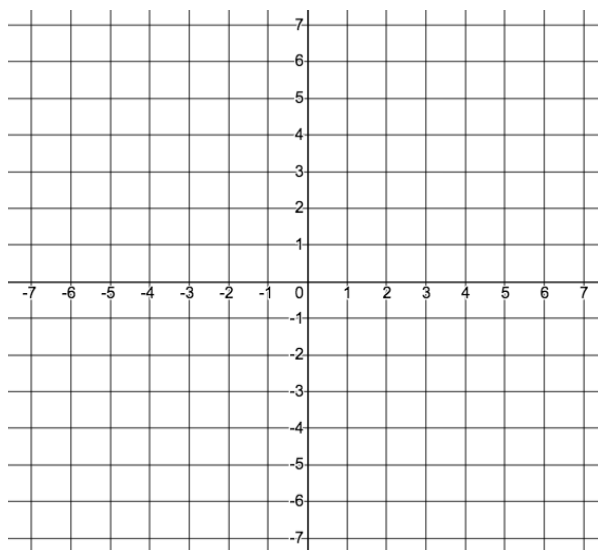
b) $f(x) = x^4 - 6x^2 + 10$

6) Sketch a graph of a function that satisfies each set of conditions

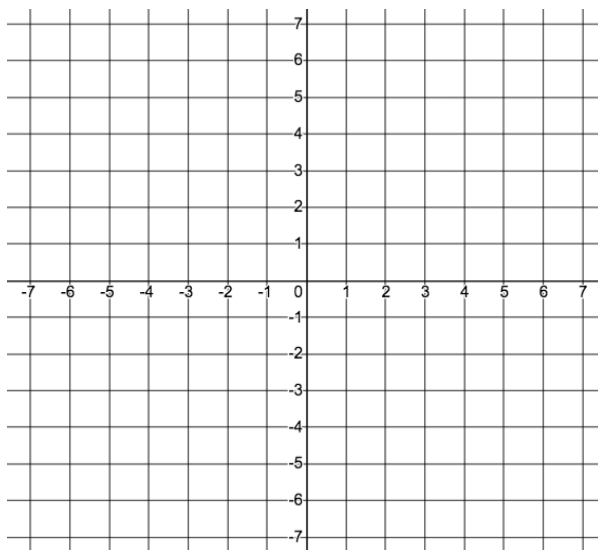
a) $f''(x) = 2$ for all x , $f'(2) = 0$, $f(2) = -3$



b) $f''(x) > 0$ when $x < -1$, $f''(x) < 0$ when $x > -1$, $f'(-1) = 1$, $f(-1) = 2$



c) $f''(x) < 0$ when $-2 < x < 1$, $f''(x) > 0$ when $x < -2$ and $x > 1$, $f(-2) = -3$, $f(0) = 0$



Answers:

1)a) A-neg, B-neg, C-pos, D-pos **b)** A-neg, B-neg, C-pos, D-neg

2)a) concave up: $x > -2$ **b)** concave up: $x < -2, x > 0$
 concave down: $x < -2$ concave down: $-2 < x < 0$

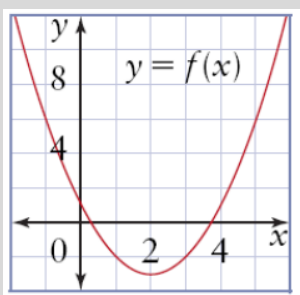
3)a) concave up: $x > 2$; concave down: $x < 2$; POI when $x = 2$

b) concave up: $x > 2$; concave down: $x < -1$ and $-1 < x < 2$; POI when $x = 2$

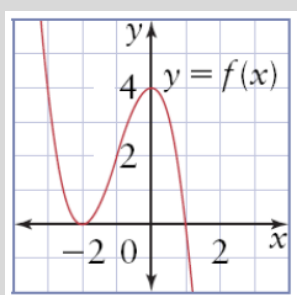
4)a) always concave up **b)** concave up: $x < 2$; concave down: $x > 2$; POI at $(2,23)$.

5)a) $(-5, -36)$ is a local min point **b)** $(-\sqrt{3}, 1)$ and $(\sqrt{3}, 1)$ are local mins, $(0,10)$ is a local max

6)a)



b)



c)

